




10 and 100 More or Less

PS Problem-solving questions




Challenge 1

1 Increase these prices by 10p.

a)  68p b)  19p c)  73p

_____p _____p _____p

2 Decrease these prices by 10p.

a)  27p b)  51p c)  44p

_____p _____p _____p

3 Sara has torn these scraps from her 100 square. Fill in the missing numbers.

a)

41	
	52

 b)

	89
98	

 c)

11	
	22

 d)

	25
	26



Marks...../10




10 and 100 More or Less




Challenge 2

1 Complete the gaps in this table.

10 less	Start number	10 more
60	70	
	30	40
	25	
45		65
5		

2 Find the missing weights of these animals.

a)  -100 kg  695 kg  +100 kg

b)  -100 kg  310 kg  +100 kg

Marks...../11

Challenge 3

PS 1 Look at this number box.



- a) If 105 goes into the box, what number comes out? _____
- b) If 131 goes into the box, what number comes out? _____
- c) 203 came **out** of the box. What number went in? _____

Marks...../3

Total marks/24

How am I doing?

